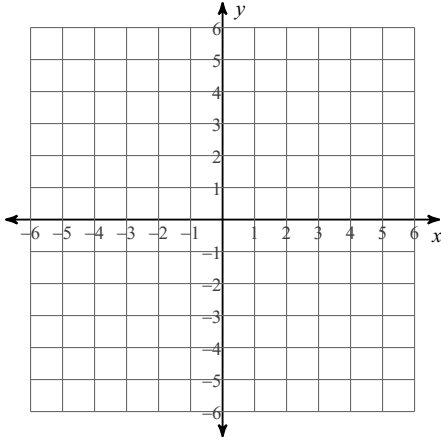


Graphing Inequalities WS

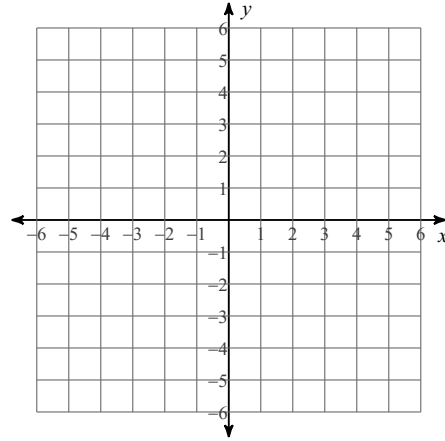
Date _____ Period _____

Sketch the graph of each linear inequality.

1) $y < -\frac{1}{5}x + 4$



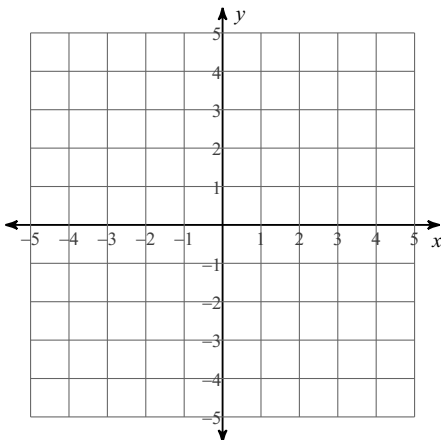
2) $y \leq 2x - 4$



Sketch the solution to each system of inequalities.

3) $y < 2x - 1$

$y > \frac{1}{2}x + 2$



4) $y < -\frac{1}{3}x + 3$

$y \leq \frac{4}{3}x - 2$

