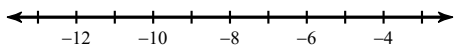


Inequalities WS

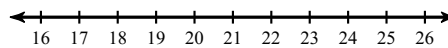
Date _____ Period _____

Solve each inequality and graph its solution.

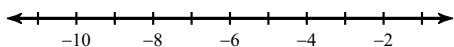
1) $5 + 3x \geq -13$



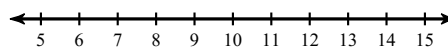
2) $9(-5 + v) \leq 135$



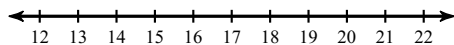
3) $39 \geq -3(k - 8)$



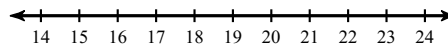
4) $6 - 5m > -29$



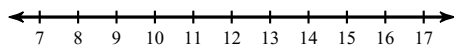
5) $2 > \frac{2 + x}{10}$



6) $4 \geq -4 + \frac{v}{2}$



7) $\frac{v}{15} - 6 \leq -5$



8) $9(n - 9) > -18$

