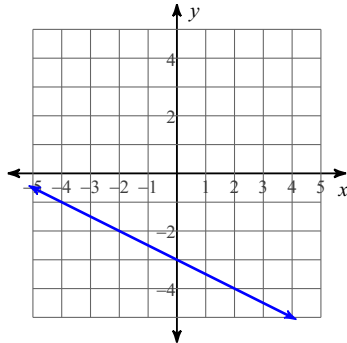


Writing Linear Equations

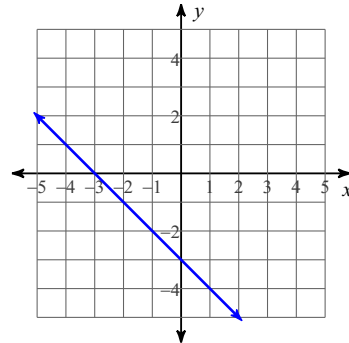
Date _____ Period _____

Write the slope-intercept form of the equation of each line.

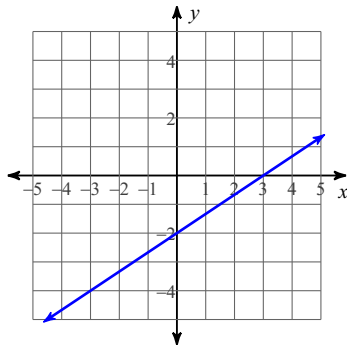
1)



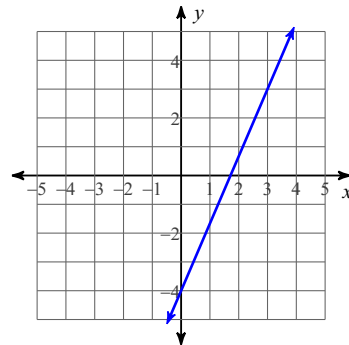
2)



3)



4)



Write the slope-intercept form of the equation of the line through the given point with the given slope.

5) through: $(2, 4)$, slope = $\frac{1}{2}$

6) through: $(-2, -5)$, slope = $\frac{7}{2}$

7) through: $(-5, -3)$, slope = $\frac{2}{5}$

8) through: $(-4, -1)$, slope = 1